

PURE FUN ACTIVITIES

MULTIPLYING BY 3 - GRADES 3-4

Multiply the problems below to find the total number.

Example: There are 3 plants. Each plant has 2 leaves.
How many leaves in all?






3 GROUPS OF 2 LEAVES = $3 \times 2 = 6$



Each ladybug has 4 spots.
How many spots in all?

____ groups of ____ spots
____ x ____
____ total



Each bee has 3 stripes.
How many stripes in all?

____ groups of ____ stripes
____ x ____
____ total



Each tomato slice has 7 seeds.
How many seeds in all?

____ groups of ____ seeds
____ x ____
____ total




Check out more activities at
PURE-FLAVOR.COM

pure
flavor®

PURE FUN ACTIVITIES

MULTIPLYING BY 3 - GRADES 3-4

Multiply the problems below to find the total number.




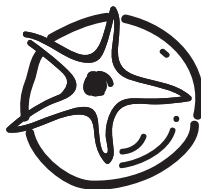
Each Mini Munchies monster has 8 teeth.
How many teeth in all?

___ groups of ___ teeth
___ x ___
___ total



Each soccer ball has 6 spots.
How many spots in all?

___ groups of ___ spots
___ x ___
___ total



Each tomato calyx has 5 points.
How many points in all?

___ groups of ___ points
___ x ___
___ total

Check out more activities at
PURE-FLAVOR.COM

pure
flavor®